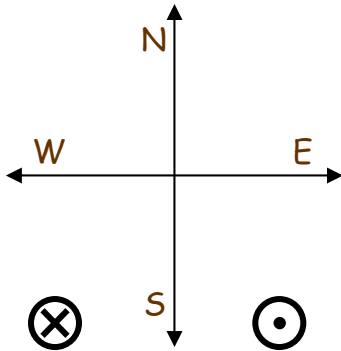


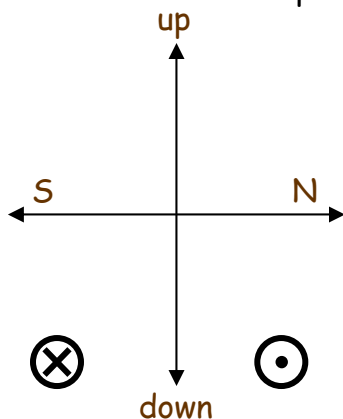
## Magnetic Field Force Worksheet

© 2015

1. A proton is moving due north in a uniform magnetic field that is pointing  $60^\circ$  west of south.  $F = qvB\sin\theta$  and  $q = 1.6 \times 10^{-19}\text{C}$ 
  - a. Draw the magnetic field vector on the coordinate system below, and label all the directions on the coordinate system.
  - b. Draw the velocity vector on the same coordinate system.
  - c. What is the angle between  $v$  and  $B$ ?
  - d. Draw the Force vector on the same coordinate system, and write down a description of the direction.
  - e. Find the magnitude of the Force vector if  $B = 1.6\text{ T}$  and  $v = 3 \times 10^6\text{ m/s}$

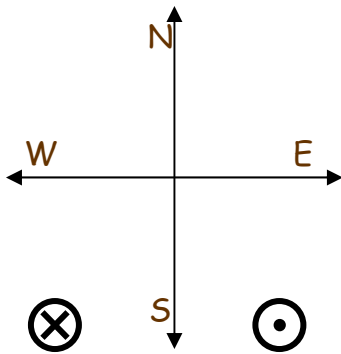


2. An electron is moving northward,  $30^\circ$  down from the horizontal in a uniform magnetic field that is pointing due west.
  - a. Draw the velocity vector on the coordinate system below, and label all the directions on the coordinate system.
  - b. Draw the magnetic field vector on the same coordinate system.
  - c. What is the angle between  $v$  and  $B$ ?
  - d. Draw the Force vector on the same coordinate system, and write down a description of the direction.



# Magnetic Field Force Worksheet

3. A proton is moving west with a speed of  $2.0 \times 10^5$  m/s in a 1.2 T uniform magnetic field. It experiences an upward magnetic force of  $3.2 \times 10^{-14}$  N.
- Sketch the velocity on a coordinate system so that the force is aimed in (or out) of the page.
  - Calculate the angle between the velocity and the magnetic field.
  - Sketch the magnetic field on the graph (you should have two possible directions for B, sketch them both).



4. After being accelerated through a potential difference of 6.5kV, a doubly charged Oxygen atom  $O_2^{-2}$  ( $m_O = 2.65 \times 10^{-26}$  kg) moves in a circle of radius 22 cm.

a. Sketch the direction the negative ion curves when it enters the magnetic field shown directed into the page.

b. Find the magnitude of the magnetic field,

$$\frac{1}{2}mv^2 = q\Delta V \text{ and } \frac{mv^2}{r} = qvB$$

$$v = \sqrt{\frac{2q\Delta V}{m}} \text{ and } \frac{mv}{r} = qB$$

